







18 The chart below shows the shoes and socks that Maddy can choose to wear.

Shoes	Socks
	 Gray (G)
 Dress Shoes (D)	 Lace (L)
 Sneakers (S)	 White (W)
	 Zigzags (Z)

a. List **all** the different ways that Maddy can choose 1 kind of shoe and 1 kind of sock to wear.

b. What is the total number of different ways Maddy can choose 1 kind of shoe and 1 kind of sock?