


3

The picture below shows a full moon that a student observed in the night sky on March 1.




Which of the following pictures shows the appearance of the Moon approximately one month later?


A.



B.



C.



D.

